

# EEE4114F: Digital Signal Processing

Class Test

7 March 2019

## SOLUTIONS

---

Name:

Student number:

---

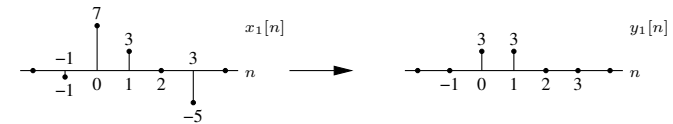
### Information

- The test is closed-book.
  - This test has *four* questions, totalling 20 marks.
  - Answer *all* the questions.
  - You have 60 minutes.
  - An information sheet is attached.
- 

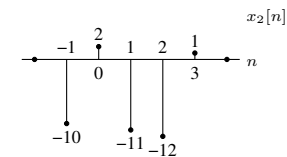
1. (5 marks) The output  $y[n]$  of a median filter is given by

$$y[n] = \text{med}(x[n-1], x[n], x[n+1]).$$

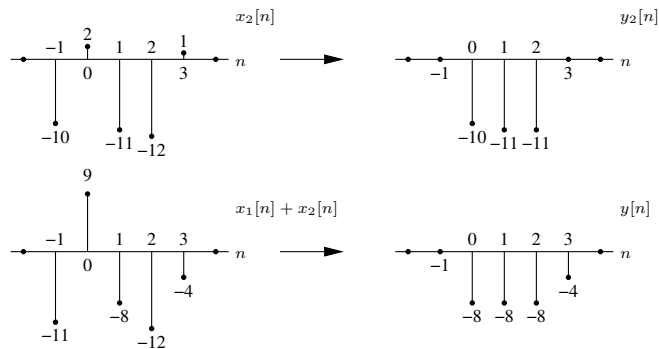
Here the median function,  $\text{med}(\ )$ , lists the 3 samples in descending order and selects the value in the middle of the list. For example, the input  $x_1[n]$  generates the output  $y_1[n]$  below:



- (a) Is the system causal? Why?
- (b) Is the system stable? Why?
- (c) Comment on whether the above median filter is linear. Justify your comments and construct a simple relevant example to illustrate your conclusion. For this purpose you may want to use the example pair given above and the input sequence below:



- (a) To calculate the output at say  $n = 10$  we need to know the inputs  $x[9]$ ,  $x[10]$ , and  $x[11]$ . Since this last input is in the future the system is not causal.
- (b) The output at any instant is always generated by taking the value of a selected input sample, so every value in  $y[n]$  must occur somewhere in  $x[n]$ . Thus if  $|x[n]| \leq B_x$  for some  $B_x$  then we must also have  $|y[n]| \leq B_x$ . Since a bounded input always produces a bounded output (with the same bound), the system is stable.
- (c) The following input-output pairs can be established:



Since we observe that  $y[n] \neq y_1[n] + y_2[n]$  the system is not additive, and therefore not linear.

2. (5 marks) Let  $x[n]$  and  $v[n]$  be defined as follows:

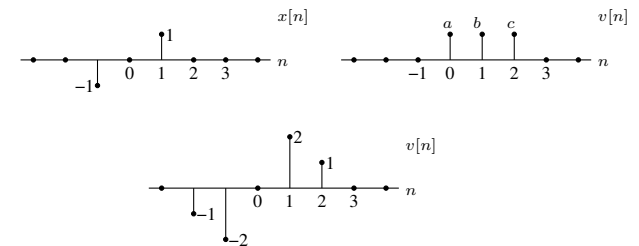
$$x[n] = \delta[n-1] - \delta[n+1] \quad \text{and} \quad v[n] = a\delta[n] + b\delta[n-1] + c\delta[n-2].$$

Suppose now that  $y[n] = v[n] * x[n]$  gives

$$y[n] = -\delta[n+1] - 2\delta[n] + 2\delta[n-2] + \delta[n-3].$$

- (a) Sketch the signals involved.  
 (b) Specify values for  $a$ ,  $b$ , and  $c$ .

(a) Plots of the signals are as follows:



(b) It might be easier to solve via graphical convolution, but the answer can also be found algebraically:

$$\begin{aligned} y[n] &= x[n] * v[n] = (\delta[n-1] - \delta[n+1]) * (a\delta[n] + b\delta[n-1] + c\delta[n-2]) \\ &= a\delta[n-1] + b\delta[n-2] + c\delta[n-3] - a\delta[n+1] - b\delta[n] - c\delta[n-1] \\ &= -a\delta[n+1] - b\delta[n] + (a-c)\delta[n-1] + b\delta[n-2] + c\delta[n-3]. \end{aligned}$$

By inspection we observe that  $a = 1$ ,  $b = 2$ , and  $c = 1$ .

3. (5 marks) Consider the discrete LTI system represented by

$$y[n] = x[n] - x[n-1]$$

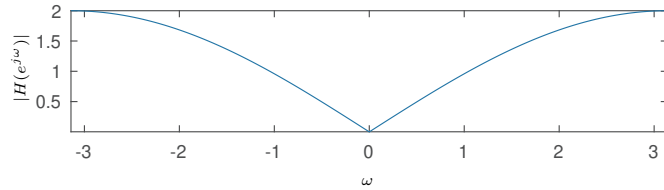
where  $x[n]$  and  $y[n]$  are the input and output respectively.

- Determine and plot the impulse response  $h[n]$ . Is the system stable?
- Determine and plot the step response corresponding to  $x[n] = u[n]$ .
- Find  $H(e^{j\omega})$  and plot its magnitude.
- Determine and plot the response to the input  $x[n] = (-1)^n$ .

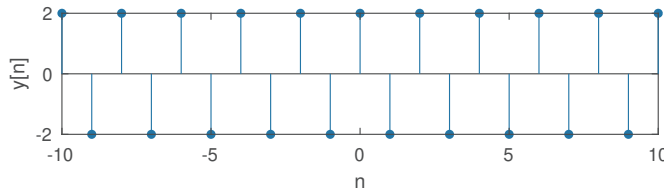
- The impulse response  $h[n]$  is the output when the input is  $x[n] = \delta[n]$ , so  $h[n] = \delta[n] - \delta[n-1]$ . Since  $\sum_{n=-\infty}^{\infty} |h[n]| = 2 < \infty$  the system is stable.
- When the input is  $x[n] = u[n]$  then the output will be  $y[n] = u[n] - u[n-1] = \delta[n]$ .
- The frequency response is

$$\begin{aligned} H(e^{j\omega}) &= \sum_{n=-\infty}^{\infty} (\delta[n] - \delta[n-1]) e^{-j\omega n} = 1 - e^{-j\omega} = e^{-j\omega/2} (e^{j\omega/2} - e^{-j\omega/2}) \\ &= 2je^{-j\omega/2} \sin(\omega/2), \end{aligned}$$

so  $|H(e^{j\omega})| = 2|\sin(\omega/2)|$ . Plot as follows:



- The response to  $x[n] = (-1)^n = e^{j\pi n}$  will be  $y[n] = H(e^{j\pi})e^{j\pi n} = 2e^{j\pi n} = 2(-1)^n$ , as follows:



4. (5 marks) A LTI system has a step response of

$$g[n] = n \left(\frac{1}{2}\right)^n u[n].$$

In other words, when the input is  $x[n] = u[n]$  then the output is  $y[n] = g[n]$  above.

- Is the system causal? Why?
- Find the Fourier transform of  $g[n]$ .
- Find an expression for its impulse response. You may want to use the fact that  $u[n] - u[n-1] = \delta[n]$ .

- The system is causal because the impulse response is right-sided.
- By applying the frequency differentiation property to the pair

$$(1/2)^n u[n] \quad \xleftrightarrow{\mathcal{F}} \quad (1 - 1/2e^{-j\omega})^{-1}$$

we find

$$\begin{aligned} G(e^{j\omega}) &= j \frac{d}{d\omega} (1 - 1/2e^{-j\omega})^{-1} = -j(1 - 1/2e^{-j\omega})^{-2} 1/2je^{j\omega} \\ &= \frac{1/2e^{j\omega}}{(1 - 1/2e^{-j\omega})^2}. \end{aligned}$$

- We are given that  $u[n] \rightarrow g[n]$  is a valid input-output pair. From time invariance  $u[n-1] \rightarrow g[n-1]$  is also a valid pair. By linearity

$$u[n] - u[n-1] \rightarrow g[n] - g[n-1]$$

is valid, so

$$\delta[n] \rightarrow g[n] - g[n-1] = n \left(\frac{1}{2}\right)^n u[n] - (n-1) \left(\frac{1}{2}\right)^{n-1} u[n-1]$$

gives the impulse response.

## Discrete-time Fourier transform properties

Sequences $x[n], y[n]$	Transforms $X(e^{j\omega}), Y(e^{j\omega})$	Property
$ax[n] + by[n]$	$aX(e^{j\omega}) + bY(e^{j\omega})$	Linearity
$x[n - n_d]$	$e^{-j\omega n_d} X(e^{j\omega})$	Time shift
$e^{j\omega_0 n} x[n]$	$X(e^{j(\omega - \omega_0)})$	Frequency shift
$x[-n]$	$X(e^{-j\omega})$	Time reversal
$nx[n]$	$j \frac{dX(e^{j\omega})}{d\omega}$	Frequency diff.
$x[n] * y[n]$	$X(e^{j\omega})Y(e^{j\omega})$	Convolution
$x[n]y[n]$	$\frac{1}{2\pi} \int_{-\pi}^{\pi} X(e^{j\theta})Y(e^{j(\omega - \theta)})d\theta$	Modulation

## Common discrete-time Fourier transform pairs

Sequence	Fourier transform
$\delta[n]$	1
$\delta[n - n_0]$	$e^{-j\omega n_0}$
1 ( $-\infty < n < \infty$ )	$\sum_{k=-\infty}^{\infty} 2\pi\delta(\omega + 2\pi k)$
$a^n u[n]$ ( $ a  < 1$ )	$\frac{1}{1 - ae^{-j\omega}}$
$u[n]$	$\frac{1}{1 - e^{-j\omega}} + \sum_{k=-\infty}^{\infty} \pi\delta(\omega + 2\pi k)$
$(n + 1)a^n u[n]$ ( $ a  < 1$ )	$\frac{1}{(1 - ae^{-j\omega})^2}$
$\frac{\sin(\omega_c n)}{\pi n}$	$X(e^{j\omega}) = \begin{cases} 1 &  \omega  < \omega_c \\ 0 & \omega_c <  \omega  \leq \pi \end{cases}$
$x[n] = \begin{cases} 1 & 0 \leq n \leq M \\ 0 & \text{otherwise} \end{cases}$	$\frac{\sin[\omega(M+1)/2]}{\sin(\omega/2)} e^{-j\omega M/2}$
$e^{j\omega_0 n}$	$\sum_{k=-\infty}^{\infty} 2\pi\delta(\omega - \omega_0 + 2\pi k)$

## Z-transform properties

Sequences $x[n], y[n]$	Transforms $X(z), Y(z)$	ROC	Property
$ax[n] + by[n]$	$aX(z) + bY(z)$	ROC contains $R_x \cap R_y$	Linearity
$x[n - n_d]$	$z^{-n_d} X(z)$	ROC = $R_x$	Time shift
$z_0^n x[n]$	$X(z/z_0)$	ROC = $ z_0 R_x$	Frequency scale
$x^*[-n]$	$X^*(1/z^*)$	ROC = $\frac{1}{R_x}$	Time reversal
$nx[n]$	$-z \frac{dX(z)}{dz}$	ROC = $R_x$	Frequency diff.
$x[n] * y[n]$	$X(z)Y(z)$	ROC contains $R_x \cap R_y$	Convolution
$x^*[n]$	$X^*(z^*)$	ROC = $R_x$	Conjugation

## Common z-transform pairs

Sequence	Transform	ROC
$\delta[n]$	1	All $z$
$u[n]$	$\frac{1}{1 - z^{-1}}$	$ z  > 1$
$-u[-n - 1]$	$\frac{1}{1 - z^{-1}}$	$ z  < 1$
$\delta[n - m]$	$z^{-m}$	All $z$ except 0 or $\infty$
$a^n u[n]$	$\frac{1}{1 - az^{-1}}$	$ z  >  a $
$-a^n u[-n - 1]$	$\frac{1}{1 - az^{-1}}$	$ z  <  a $
$na^n u[n]$	$\frac{az^{-1}}{(1 - az^{-1})^2}$	$ z  >  a $
$-na^n u[-n - 1]$	$\frac{az^{-1}}{(1 - az^{-1})^2}$	$ z  <  a $
$\begin{cases} a^n & 0 \leq n \leq N - 1 \\ 0 & \text{otherwise} \end{cases}$	$\frac{1 - a^N z^{-N}}{1 - az^{-1}}$	$ z  > 0$
$\cos(\omega_0 n)u[n]$	$\frac{1 - \cos(\omega_0)z^{-1}}{1 - 2\cos(\omega_0)z^{-1} + z^{-2}}$	$ z  > 1$
$r^n \cos(\omega_0 n)u[n]$	$\frac{1 - r\cos(\omega_0)z^{-1}}{1 - 2r\cos(\omega_0)z^{-1} + r^2z^{-2}}$	$ z  >  r $