

EEE4001F: Digital Signal Processing

Class Test 1

17 March 2011

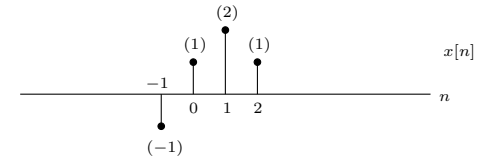
Name:

Student number:

Information

- The test is closed-book.
 - This test has *four* questions, totalling 20 marks.
 - Answer *all* the questions.
 - You have 45 minutes.
-

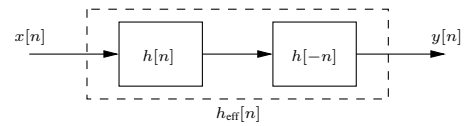
1. (5 marks) If $x[n]$ is the signal below



then plot the following:

- $y_1[n] = x[2n - 2]$
- $y_2[n] = x[-n - 1]$
- $y_3[n] = x[n] * \delta[n - 1]$
- $y_4[n] = x[n - 1] * u[n - 1]$
- $y_5[n] = x[n] - x[n - 1]$.

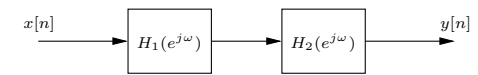
2. (5 marks) Consider the system below



where $h[n] = \delta[n] - 2\delta[n - 1] - \delta[n - 2]$.

- Find $H(e^{j\omega})$, the Fourier transform of $h[n]$.
- Find and plot the effective impulse response $h_{\text{eff}}[n]$ linking the input $x[n]$ and the output $y[n]$.
- Give an expression for the effective system transfer function $H_{\text{eff}}(e^{j\omega})$ in terms of $H(e^{j\omega})$.

3. (5 marks) Suppose we have the following cascade of all-pole filters:



where

$$H_1(e^{j\omega}) = \frac{1}{1 - \frac{1}{2}e^{-j\omega}} \quad \text{and} \quad H_2(e^{j\omega}) = \frac{1}{1 - \frac{1}{3}e^{-j\omega}}.$$

- Find $h[n]$ such that the input $x[n]$ and output $y[n]$ satisfy the relationship $y[n] = h[n] * x[n]$.
- Find $g[n]$ such that $x[n] = g[n] * y[n]$.

4. (5 marks) Consider the minimum-phase system with transfer function

$$H(z) = \frac{1 - (1/2)z^{-1}}{1 - (1/3)z^{-1}},$$

where the region of convergence is $|z| > \frac{1}{3}$.

- Find a difference equation linking the input $x[n]$ and the output $y[n]$.
- Find the impulse response of the system.
- Find the transfer function of a causal and stable system that is the inverse of $H(z)$, and sketch the poles, zeros, and region of convergence of this inverse system in the z-plane.

Fourier transform properties

Sequences $x[n], y[n]$	Transforms $X(e^{j\omega}), Y(e^{j\omega})$	Property
$ax[n] + by[n]$	$aX(e^{j\omega}) + bY(e^{j\omega})$	Linearity
$x[n - n_d]$	$e^{-j\omega n_d} X(e^{j\omega})$	Time shift
$e^{j\omega_0 n} x[n]$	$X(e^{j(\omega - \omega_0)})$	Frequency shift
$x[-n]$	$X(e^{-j\omega})$	Time reversal
$nx[n]$	$j \frac{dX(e^{j\omega})}{d\omega}$	Frequency diff.
$x[n] * y[n]$	$X(e^{-j\omega})Y(e^{-j\omega})$	Convolution
$x[n]y[n]$	$\frac{1}{2\pi} \int_{-\pi}^{\pi} X(e^{j\theta})Y(e^{j(\omega - \theta)})d\theta$	Modulation

Common Fourier transform pairs

Sequence	Fourier transform
$\delta[n]$	1
$\delta[n - n_0]$	$e^{-j\omega n_0}$
1 $(-\infty < n < \infty)$	$\sum_{k=-\infty}^{\infty} 2\pi \delta(\omega + 2\pi k)$
$a^n u[n]$ $(a < 1)$	$\frac{1}{1 - ae^{-j\omega}}$
$u[n]$	$\frac{1}{1 - e^{-j\omega}} + \sum_{k=-\infty}^{\infty} \pi \delta(\omega + 2\pi k)$
$(n + 1)a^n u[n]$ $(a < 1)$	$\frac{1}{(1 - ae^{-j\omega})^2}$
$\frac{\sin(\omega_c n)}{\pi n}$	$X(e^{j\omega}) = \begin{cases} 1 & \omega < \omega_c \\ 0 & \omega_c < \omega \leq \pi \end{cases}$
$x[n] = \begin{cases} 1 & 0 \leq n \leq M \\ 0 & \text{otherwise} \end{cases}$	$\frac{\sin[\omega(M+1)/2]}{\sin(\omega/2)} e^{-j\omega M/2}$
$e^{j\omega_0 n}$	$\sum_{k=-\infty}^{\infty} 2\pi \delta(\omega - \omega_0 + 2\pi k)$

Common z-transform pairs

Sequence	Transform	ROC
$\delta[n]$	1	All z
$u[n]$	$\frac{1}{1 - z^{-1}}$	$ z > 1$
$-u[-n - 1]$	$\frac{1}{1 - z^{-1}}$	$ z < 1$
$\delta[n - m]$	z^{-m}	All z except 0 or ∞
$a^n u[n]$	$\frac{1}{1 - az^{-1}}$	$ z > a $
$-a^n u[-n - 1]$	$\frac{1}{1 - az^{-1}}$	$ z < a $
$na^n u[n]$	$\frac{az^{-1}}{(1 - az^{-1})^2}$	$ z > a $
$-na^n u[-n - 1]$	$\frac{az^{-1}}{(1 - az^{-1})^2}$	$ z < a $
$\begin{cases} a^n & 0 \leq n \leq N - 1, \\ 0 & \text{otherwise} \end{cases}$	$\frac{1 - a^N z^{-N}}{1 - az^{-1}}$	$ z > 0$
$\cos(\omega_0 n) u[n]$	$\frac{1 - \cos(\omega_0)z^{-1}}{1 - 2\cos(\omega_0)z^{-1} + z^{-2}}$	$ z > 1$
$r^n \cos(\omega_0 n) u[n]$	$\frac{1 - r \cos(\omega_0)z^{-1}}{1 - 2r \cos(\omega_0)z^{-1} + r^2 z^{-2}}$	$ z > r$